

# Adding Together

Can you count the fish below to create a number sentence? Show how you would work this out using a number line.

1)



+



=



2)



+




=



3)



+



=



4)



+



=



5)




+




=



6)



+



=

